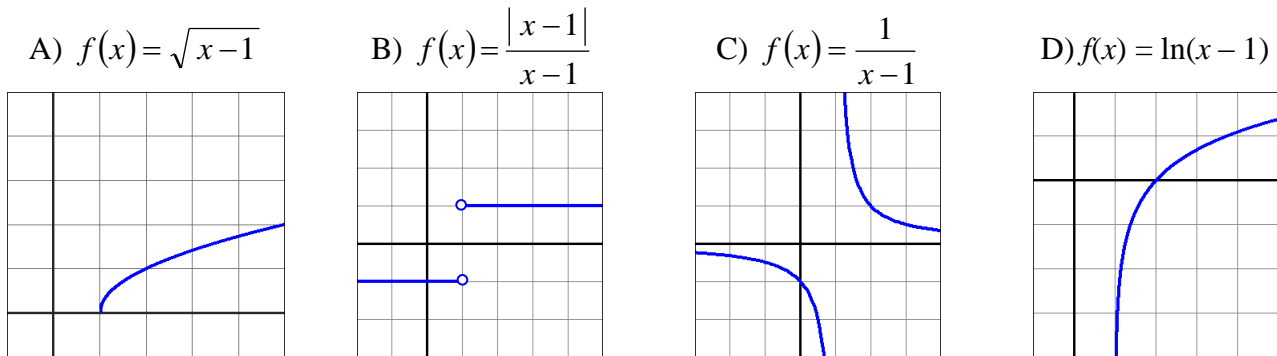


Calculus 140, section 2.4 One-Sided and Infinite Limits

notes prepared by Tim Pilachowski

Examples A–D: Consider the following functions. Why is it problematic to try to evaluate $\lim_{x \rightarrow 1} f(x)$ for them?



Definition 2.4: “Let f be a function defined at each point of some open interval (c, a) . A number L is the **limit of $f(x)$ as x approaches a from the left** (or is the **left-hand limit of f at a**) if for every $\varepsilon > 0$ there is a number $\delta > 0$ such that

$$\text{if } a - \delta < x < a, \text{ then } |f(x) - L| < \varepsilon.$$

In this case we write $\lim_{x \rightarrow a^-} f(x) = L$ and say that the **left-hand limit of f at a** exists.”

The notation $\lim_{x \rightarrow a^-} f(x)$ is read “the limit of $f(x)$ as x approaches a from the left”.

If we were to consider some open interval (a, c) to the *right* of a , we get the analogous **right-hand limit of f at a** . If $\lim_{x \rightarrow a^+} f(x) = L$ we say that the **right-hand limit of f at a** exists.”

The notation $\lim_{x \rightarrow a^+} f(x)$ is read “the limit of $f(x)$ as x approaches a from the right”.

How do these **one-sided limits** connect to the ordinary, or **two-sided limits** of section 2.2?

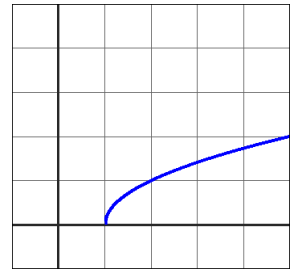
Theorem 2.5 (short version): If both one-sided limits exist and also $\lim_{x \rightarrow a^+} f(x) = \lim_{x \rightarrow a^-} f(x)$, then $\lim_{x \rightarrow a} f(x)$ exists, and

$$\lim_{x \rightarrow a} f(x) = \lim_{x \rightarrow a^+} f(x) = \lim_{x \rightarrow a^-} f(x).$$

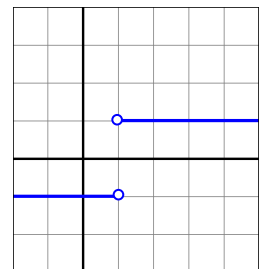
Good news: All of the properties given in Lecture 2.3 (sum rule, constant multiple rule, etc.) apply to one-sided limits!

As always, you should read through the more detailed explanations in the text, and look over the text’s worked-out Examples.

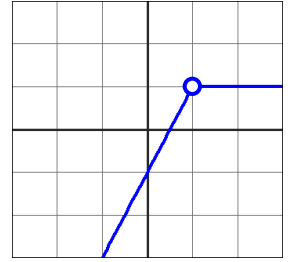
Example A: Given $f(x) = \sqrt{x-1}$, evaluate $\lim_{x \rightarrow 1^-} f(x)$, $\lim_{x \rightarrow 1^+} f(x)$ and $\lim_{x \rightarrow 1} f(x)$.



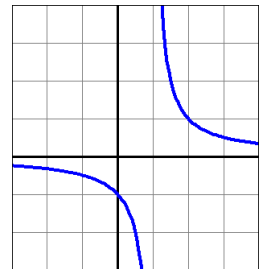
Example B: Given $f(x) = \frac{|x-1|}{x-1}$, evaluate $\lim_{x \rightarrow 1^-} f(x)$, $\lim_{x \rightarrow 1^+} f(x)$ and $\lim_{x \rightarrow 1} f(x)$.



Example B extended: Given $f(x) = \begin{cases} 2x-1 & \text{for } x < 1 \\ 1 & \text{for } x > 1 \end{cases}$, evaluate $\lim_{x \rightarrow 1^-} f(x)$, $\lim_{x \rightarrow 1^+} f(x)$ and $\lim_{x \rightarrow 1} f(x)$.

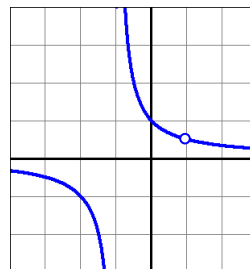


Example C: Given $f(x) = \frac{1}{x-1}$, evaluate $\lim_{x \rightarrow 1^-} f(x)$, $\lim_{x \rightarrow 1^+} f(x)$ and $\lim_{x \rightarrow 1} f(x)$.

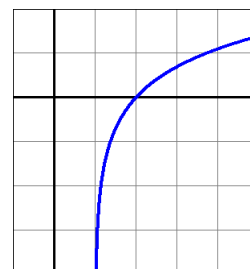


Definition 2.6 (short version): If $\lim_{x \rightarrow a^{+} \text{ or } -} f(x) = \infty$, or $\lim_{x \rightarrow a^{+} \text{ or } -} f(x) = -\infty$, then “the vertical line $x = a$ is called a **vertical asymptote of the graph of f** , and we say that we say that f has an **infinite ... limit at a** .”

Example C extended: Given $f(x) = \frac{x-1}{x^2-1}$, find all vertical asymptotes.

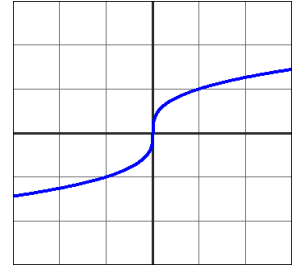


Example D: Given $f(x) = \ln(x-1)$, evaluate $\lim_{x \rightarrow 1^-} f(x)$, $\lim_{x \rightarrow 1^+} f(x)$ and $\lim_{x \rightarrow 1} f(x)$.



The text considers the graph of $f(x) = \sqrt[3]{x}$. While it has no vertical *asymptotes*, something interesting occurs when we consider the slope of the *tangent* at $x = 0$.

$$\lim_{x \rightarrow 0} \frac{f(x) - f(0)}{x - 0} = \frac{x^{1/3} - 0}{x - 0} = \frac{1}{x^{2/3}} = \infty$$



Definition 2.7: “Suppose f is continuous at a . If $\lim_{x \rightarrow a} \frac{f(x) - f(a)}{x - a} = \infty$ or $\lim_{x \rightarrow a} \frac{f(x) - f(a)}{x - a} = -\infty$ then we say that the graph of f has a **vertical tangent at $(a, f(a))$** . In that case the vertical line $x = a$ is called the **line tangent to the graph of f at a** .”